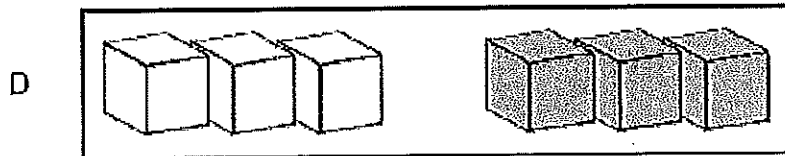
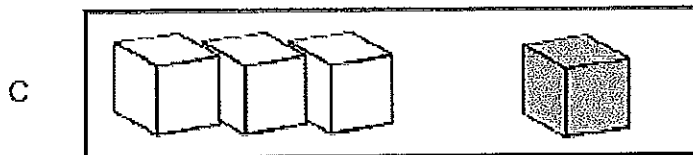
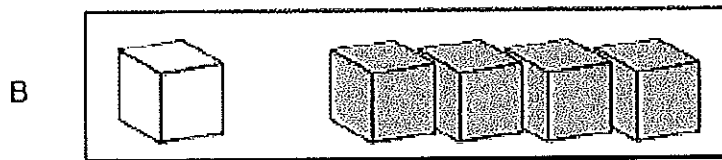
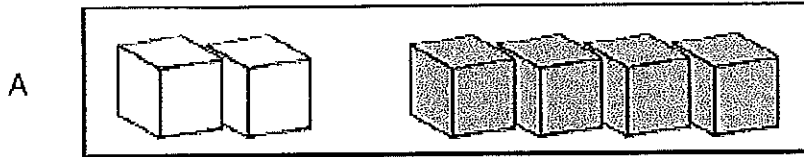


Which shows one way to make 5?




How many cubes?



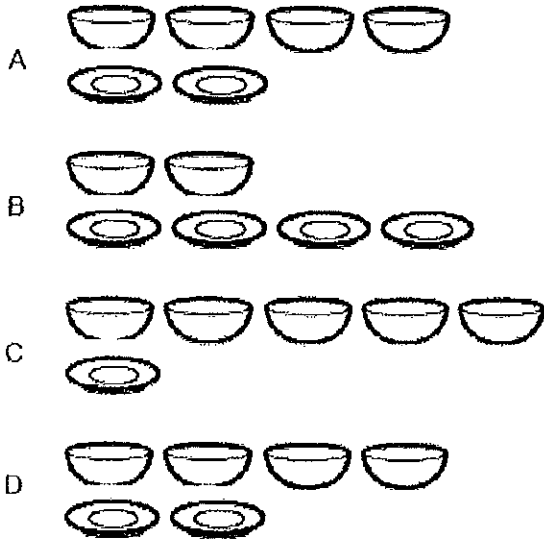
- A 2
- B 3
- C 4
- D 5

How many ducks?

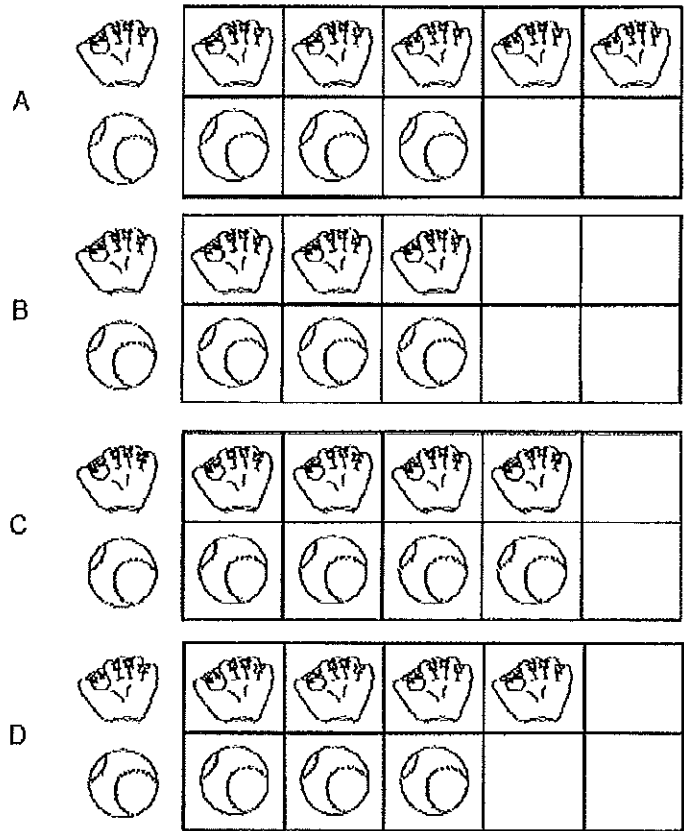
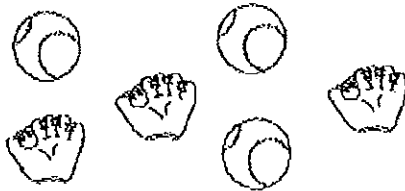


- A 4
- B 5
- C 2
- D 3

Which shows more plates than bowls?



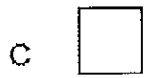
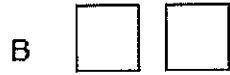

Which graph shows the correct number of objects?



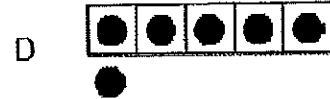
Which numbers are in order from smallest to largest?

- A 1, 2, 4
- B 2, 1, 4
- C 4, 2, 1
- D 4, 1, 2

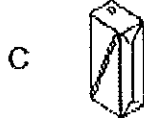

Count the squares. Which shows 2 fewer?



Which number is less than 4?



What is the third item in the row?






How many pretzels are there?




- A 6
- B 7
- C 8
- D 9

Which number is less than 10?



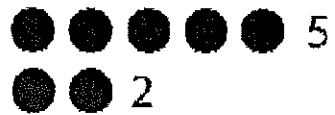
Look for a pattern.

How many strawberries will go in the empty box?



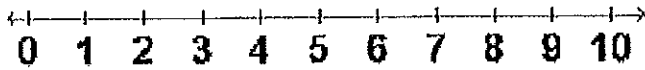
- A
- B
- C
- D

Which of these two numbers is greater?




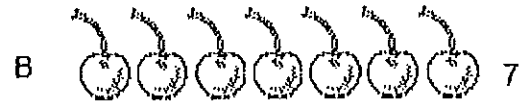
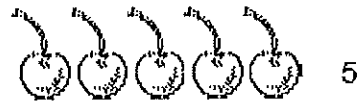
- A 1
- B 5
- C 2
- D 3

Use the number line. Which numbers are in order?



- A 2, 9, 7, 4
- B 2, 4, 9, 7
- C 2, 4, 7, 9
- D 4, 2, 7, 9


Which number is two fewer than 5?



Count the penguins. Which group has 2 more penguins?



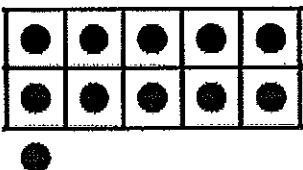
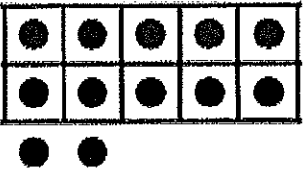


Which shows the number of buttons?




- A 16
- B 19
- C 17
- D 14

Which shows the number in the box?

14

- A 
- B 
- C 
- D 





How many birds are there?




- A 12
- B 11
- C 10
- D 9


Which number is missing?

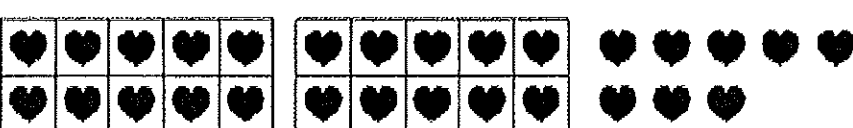



- A 
- B 
- C 
- D 

Which shows the number 28?

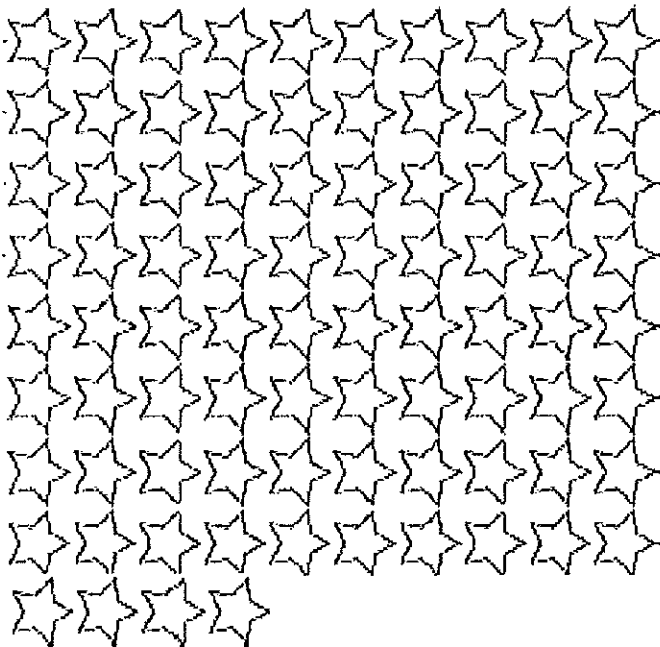
A 

B 

C 

D 

How many stars are there?



- A 74
- B 63
- C 80
- D 84

Which pattern shows counting by 2s?

A 

21	22	23	24	25
26	27	28	29	30

B 

21	22	23	24	25
26	27	28	29	30

C 

11	12	13	14	15
16	17	18	19	20

D 

21	22	23	24	25
26	27	28	29	30

Tim has 4 red apples. He has 2 yellow apples. Which sentence tells how many apples he has in all?



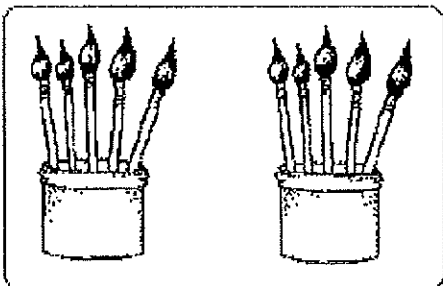
- A 2 and 2 is 4.
- B 4 and 2 is 6.
- C 4 and 4 is 8.
- D 4 and 1 is 5.

Which addition sentence matches the picture?



- A  $3 + 1 = 4$
- B  $2 + 1 = 3$
- C  $3 + 2 = 5$
- D  $2 + 2 = 4$

Which addition sentence matches the picture?



- A  $5 + 5 = 10$
- B  $5 + 2 = 7$
- C  $3 + 3 = 6$
- D  $4 + 5 = 9$

5 balls have stripes.

3 balls have dots.

Which picture shows how many balls all together?

- A
- B
- C
- D